

(1)

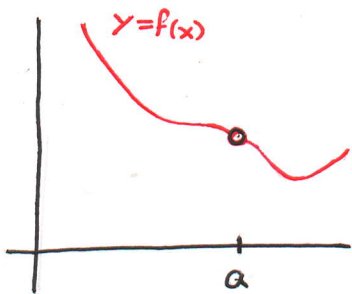
Lecture 4: Continuity

How can we mathematically define the idea that some curves can be drawn without lifting the pen from the paper and other curves cannot?

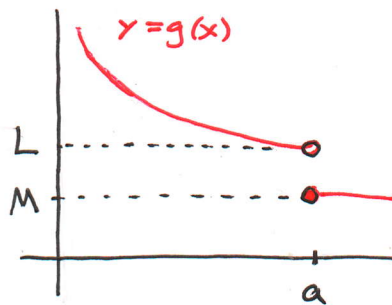
We will think of a function $f(x)$ as continuous if the graph $y=f(x)$ is one piece.

Ex. The following functions are discontinuous at $x=a$.
What exactly goes wrong?

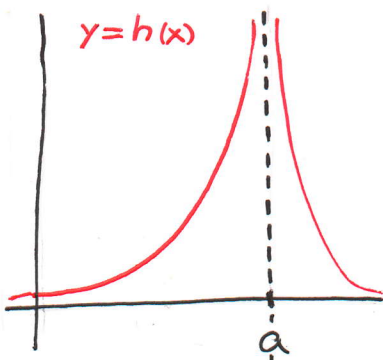
1)



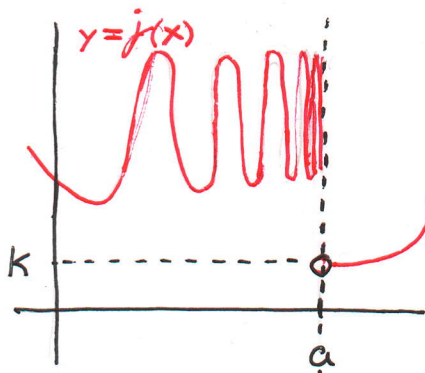
2)



3)



4)



(2)

Solution:

1) Notice that $f(a)$ is undefined, However,

$\lim_{x \rightarrow a} f(x)$ exists.

2) Here $f(a)$ is defined, but not $\lim_{x \rightarrow a} g(x)$:

$$\lim_{x \rightarrow a^-} f(x) = L \neq \lim_{x \rightarrow a^+} g(x) = g(a) = M.$$

3) Neither $h(a)$, nor $\lim_{x \rightarrow a} h(x)$;

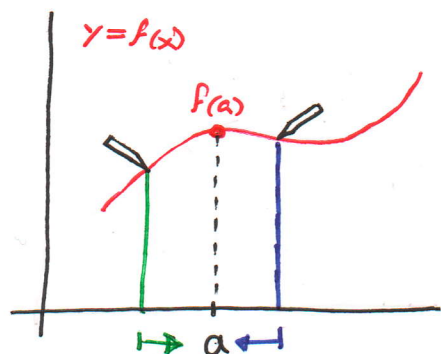
$$\lim_{x \rightarrow a} h(x) = +\infty.$$

4) Notice that $\lim_{x \rightarrow a^+} j(x) = k$, but $\lim_{x \rightarrow a^-} j(x) = \emptyset$

The left-hand limit diverges by oscillation.

For the curve $y = f(x)$ to be connected at $x = a$, the left part of the curve must merge with the right side of the curve.

(3)



Def: A function f is continuous at $x=a$ if

$$\lim_{x \rightarrow a} f(x) = f(a)$$

Def: A function f is continuous from the right at

$$x=a \text{ if } \lim_{x \rightarrow a^+} f(x) = f(a)$$

and f is continuous from the left at $x=a$

$$\lim_{x \rightarrow a^-} f(x) = f(a)$$

Ex. Where are each of the following functions

discontinuous?

$$(a) f(x) = \frac{x^2 - x - 2}{x - 2} \quad (b) f(x) = \begin{cases} \frac{1}{x^2} & \text{if } x \neq 0 \\ 1 & \text{if } x = 0 \end{cases}$$

$$(c) f(x) = \begin{cases} \frac{x^2 - x - 2}{x - 2} & \text{if } x \neq 2 \\ 1 & \text{if } x = 2 \end{cases}$$

(4)

(d) $f(x) = \lfloor x \rfloor$ greatest integer function.Solution:(a) $f(x) = \frac{x^2 - x - 2}{x - 2}$ is a rational functionBy the limit laws, $\lim_{x \rightarrow a} f(x) = f(a)$ unless $a = 2$.Since $f(2) = \emptyset$, f is discontinuous at $a = 2$.Notice, however, that $\lim_{x \rightarrow 2} \frac{x^2 - x - 2}{x - 2} =$

$$= \lim_{x \rightarrow 2} \frac{\cancel{(x-2)}(x+1)}{\cancel{(x-2)}} = \lim_{x \rightarrow 2} (x+1) = 3.$$

(b) $f(x) = \begin{cases} \frac{1}{x^2} & \text{if } x \neq 0 \\ 1 & \text{if } x = 0 \end{cases}$ is defined everywhereif $a \neq 0$ $\lim_{x \rightarrow a} f(x) = \lim_{x \rightarrow a} \frac{1}{x^2} = \frac{1}{a^2} = f(a)$

by the limit laws.

However $\lim_{x \rightarrow 0} \frac{1}{x^2} = \frac{1}{0^+} = +\infty$.(c) $f(x) = \begin{cases} \frac{x^2 - x - 2}{x - 2} & \text{if } x \neq 2 \\ 1 & \text{if } x = 2 \end{cases}$ is clearly continuous at every $a \neq 2$.

$$\lim_{x \rightarrow 2} f(x) = \lim_{x \rightarrow 2} (x+1) = 3 \neq 1 = f(2)$$

(5)

Hence f is discontinuous at $a=2$.

(d) $f(x) = \lfloor x \rfloor$ works like this:

$$f(3.1) = 3 \text{ (round down)}, \quad f(5.9) = 5,$$

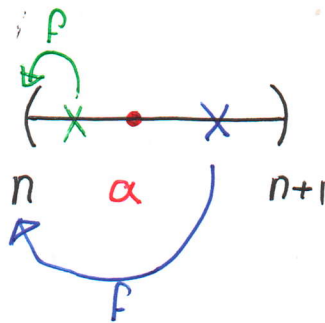
$$f(-0.01) = -1, \quad f(-5.9) = -6.$$

Let $n \leq a < n+1$ be a number between two integers.

$$\text{Then } \lim_{x \rightarrow a^+} f(x) = f(a) = n \text{ and}$$

$$\lim_{x \rightarrow a^-} f(x) = f(a) = n$$

Thus f is continuous at $a \notin \mathbb{Z}$



$$\text{If } a = n, \quad \lim_{x \rightarrow n^+} f(x) = n \text{ and } \lim_{x \rightarrow n^-} f(x) = n-1$$

Thus f is right-continuous at every a , but not left-continuous at every integer.

(6)

Ex. Show that the function $f(x) = 1 - \sqrt{1-x^2}$ is continuous on the interval $[-1, 1]$

Solution:

$$\begin{aligned}
 \text{If } -1 < a < 1, \quad \lim_{x \rightarrow a} (1 - \sqrt{1-x^2}) \\
 &= 1 - \lim_{x \rightarrow a} \sqrt{1-x^2} \quad (\text{by limit laws for } \pm) \\
 &= 1 - \sqrt{\lim_{x \rightarrow a} (1-x^2)} \quad (\lim \sqrt{\cdot} = \sqrt{\lim}) \\
 &= 1 - \sqrt{1-a^2} \quad (\text{by limit laws for } x, \pm) \\
 &= f(a)
 \end{aligned}$$

Similar calculations show that

$$\lim_{x \rightarrow -1^+} f(x) = 1 = f(-1) \quad \text{and} \quad \lim_{x \rightarrow 1^-} f(x) = f(1)$$

Thm: If f and g are continuous at $x=a$ and c is a constant, then the following functions are also continuous at $x=a$.

$$1. f+g \quad 2. f-g \quad 3. cf$$

$$4. fg \quad 5. \frac{f}{g} \text{ if } g(a) \neq 0$$

(7)

The proof is a simple application of the limit laws and the observations $\lim_{x \rightarrow a} f(x) = f(a)$ and $\lim_{x \rightarrow a} g(x) = g(a)$.

Remark: Polynomials and Rational Functions are continuous at every point where the function is defined.

If $p(x)$ is a polynomial

$\lim_{x \rightarrow a} p(x) = p(a)$ by limit laws for addition and multiplication.

If $R(x)$ is a rational map $R(x) = \frac{p(x)}{q(x)}$

$\lim_{x \rightarrow a} R(x) = \frac{p(a)}{q(a)}$ by limit laws for addition, multiplication, and division. (If $q(a) \neq 0$).

Remark: Continuity at $x=a$ amounts to the algebraic assertion that $\lim_{x \rightarrow a} f(x)$ gives the same result as simply plugging a into f .
"Just plug in!"

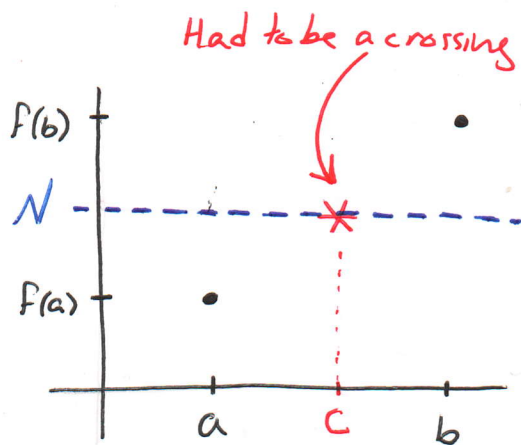
(8)

The following theorem might appear to be stating the obvious, but its statement is intimately connected with the structure of the space \mathbb{R} .

Thm: (Intermediate Value Theorem)

Suppose f is continuous on the closed interval $[a, b]$ and N be any number between $f(a)$ and $f(b)$, where $f(a) \neq f(b)$

Then there exists a number c in (a, b) such that $f(c) = N$.



Think of $y = f(x)$ as an invisible connected string in the plane. We only know the points $(a, f(a))$ and $(b, f(b))$. It appears intuitively obvious that at least one point of the string is in contact with the line $y = N$.

(9)

Ex. Show that the equation

$$4x^3 - 6x^2 + 3x - 2 = 0.$$

has a root between 1 and 2.

Solution:

Let $p(x) = 4x^3 - 6x^2 + 3x - 2$. Then $p(x)$ is continuous but we don't see the graph of $p(x)$ (it is an invisible string to us).

However, $p(1) = -1 < 0$

$$p(2) = 12 > 0$$

Thus part of the curve is below the x -axis and another part is above the x -axis. By the intermediate value theorem, there must be at least one $1 < c < 2$ such that $p(c) = 0$.

Ex. Show that the equation

$$\sqrt[3]{x} = 1 - x$$

has a root (solution).

Solution:

It is often convenient to compare things to

$$0: \quad \sqrt[3]{x} = 1-x \quad \text{if and only if}$$

$$\sqrt[3]{x} + x - 1 = 0$$

Let $f(x) = \sqrt[3]{x} + x - 1$. Clearly $f(x)$ is continuous.

$$\text{Now } f(0) = \sqrt[3]{0} + 0 - 1 = -1 < 0$$

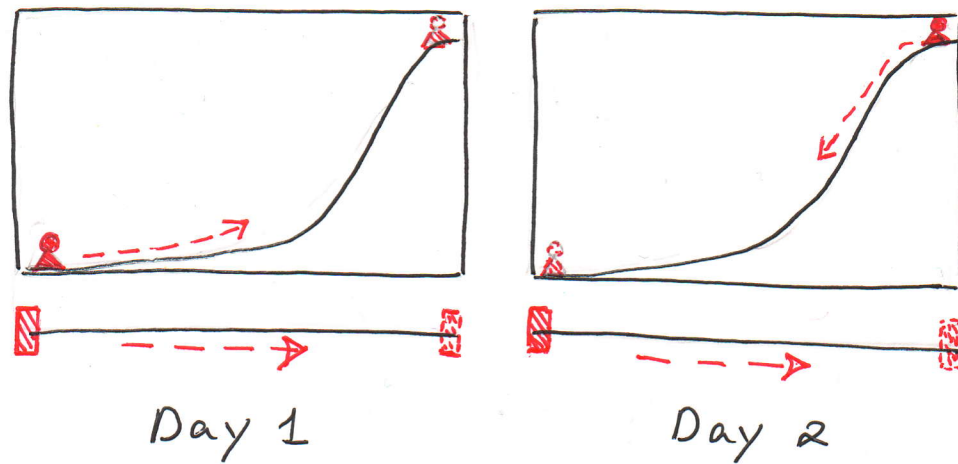
$$f(1) = \sqrt[3]{1} + 1 - 1 = 1 > 0$$

Thus by the Intermediate Value Theorem, there is at least one value $0 < c < 1$ such that $f(c) = 0$.

Ex. A Tibetan monk leaves the monastery at 7:00 AM and takes his usual path to the top of the mountain, arriving at 7:00 PM. The following morning, he starts at 7:00 AM at the top and takes the same path back, arriving at the monastery at 7:00 PM.

Show that there is a point on the path that the monk will cross exactly at the same time of day on both days.

(11)



Solution:

Can you demonstrate this without any fancy proofs?
How do you make the conclusion seem intuitive?

Mathematically, we can argue as follows:

Let $f(t)$ be the position of the monk on day 1
and $g(t)$ be the position of the monk on day 2.

Normalize time to be $0 \equiv 7:00 \text{ AM}$ $1 \equiv 7:00 \text{ PM}$.

Normalize height to be $0 \equiv \text{base of the mountain}$
 $1 \equiv \text{top of the mountain}$.

We wish to display that a solution to the equation

$$f(t) = g(t)$$

Must exist.

(12)

This equation is identical to

$$f(t) - g(t) = 0$$

Define $k(t) = f(t) - g(t)$.

Since the monk was moving without teleporting on day 1 and day 2, both $f(t)$ and $g(t)$ are continuous functions. Hence $k(t)$ is also continuous.

Notice that

$$k(0) = f(0) - g(0) = 0 - 1 = -1 < 0$$

$$k(1) = f(1) - g(1) = 1 - 0 = 1 > 0$$

Hence by the mean value theorem, there must be at least one moment of time $0 < t_0 < 1$

such that $k(t_0) = 0$.

This is the time when on both days, the monk stands on the same place on the mountain.